

THE
CHILDREN'S
HOUSE

OF




MONTESSORI
INC.

1979


AT-HOME WORKBOOK

THIRD YEAR STUDENTS

VOLUME 3 • SPRING 2020



LANGUAGE ARTS



Name _____

Rhyming Clues

Rhyming Words

Read each clue. Find the rhyming word from the box that matches the clue and write it on the line.

look	sit	cake	feet	jug	light
broom	bird	door	hair	tooth	had

1 Rhymes with **book** _____

2 Rhymes with **bear** _____

3 Rhymes with **booth** _____

4 Rhymes with **store** _____

5 Rhymes with **night** _____

6 Rhymes with **mug** _____

7 Rhymes with **meat** _____

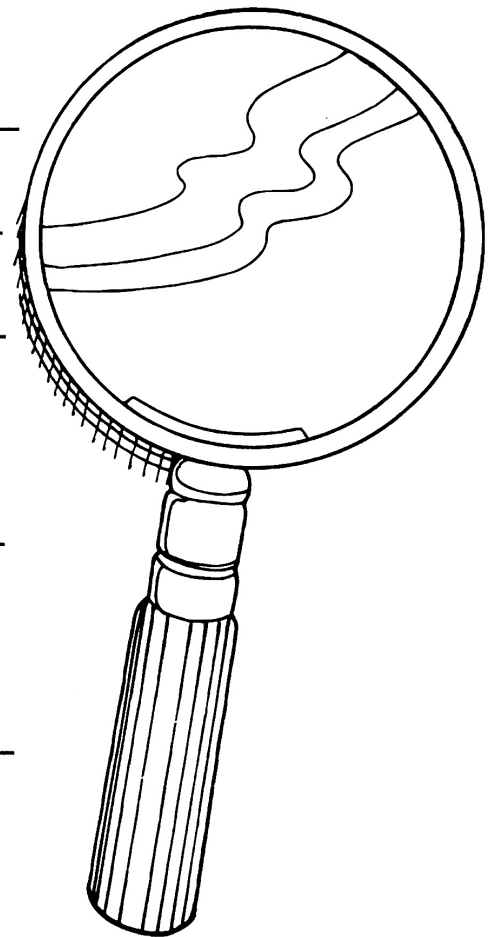
8 Rhymes with **sad** _____

9 Rhymes with **make** _____

10 Rhymes with **lit** _____

11 Rhymes with **heard** _____

12 Rhymes with **room** _____



Name _____

Rhyme in a Line

Rhyming Words

Read each set of rhyming words. Use a rhyming word from the box to complete each set.

heat	net	dock	must	hand	sun
found	line	bake	catch	hike	flight

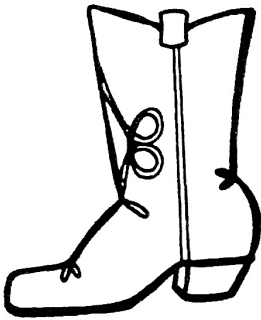
- 1 fun, stun, _____
- 2 stand, band, _____
- 3 fine, mine, _____
- 4 jet, set, _____
- 5 sock, lock, _____
- 6 match, latch, _____
- 7 sound, hound, _____
- 8 just, trust, _____
- 9 bike, like, _____
- 10 treat, seat, _____
- 11 cake, rake, _____
- 12 night, right, _____





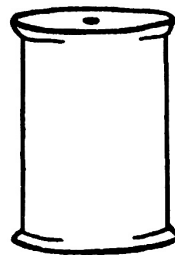
spoon

tooth



boot

spool



poodle

goose

Write a letter
to a friend
about

a book

that is lots of
fun.

Handwriting practice lines consisting of four sets of three horizontal lines each. Each set includes a solid top line, a dashed middle line, and a solid bottom line.

Name _____

Maria's Family

Find the words from the word box in the word search puzzle below. Circle the words you find.

Maria's Family Word Search



Word Box

bag

big

family

jet

sand

beach

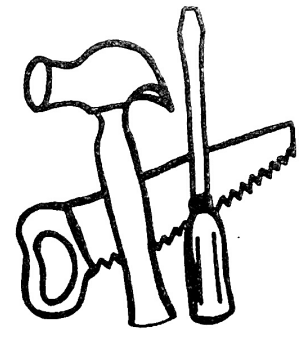
carry

fun

ride

trip

pool



food



broom




stool



tools

moon



Target words: see, we

Directions: Write the missing word in each sentence.

see we



1. Do you _____ the monkey?

2. _____ can _____ the monkey.

3. I can _____ him swing.

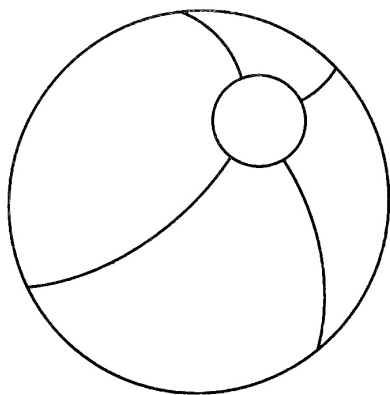
Directions: Find and circle the word **see**. It can go → or ↓.

m	e	k	e	s	r
o	t	s	e	e	t
q	l	i	k	e	x
e	s	e	e	p	v
s	o	e	a	d	c

How many did you circle? _____

Name _____

Mark's New Toy

**Read the story below.**

Mark saw a new toy at the store. It was a blue and red ball. Mark told his mom about the ball. His mom said, "We will get it tomorrow." After Mark got the ball, he played with it every day.

Answer the questions. Fill in the circle beside the correct answer, or write the answer on the lines provided.

1. This story is about _____.

- a new toy
- the toy store
- Mark's sister

2. The ball was blue and _____.

- green
- black
- red

3. What does Mark's mom say about the ball?


NAME _____

Target words: is, a, and


Directions: Write the missing word in each sentence.

is a and



1. This _____ a monkey.



2. This is _____ cat.



3. Here is a cat _____ a fish.



Directions: Find and circle the word **and**. It can go → or ↓.

a	n	d	e	b	r
i	t	a	n	d	e
k	l	a	n	e	x
e	z	n	a	n	b
m	o	d	a	d	c

How many did you circle? _____

Name _____

Missing Middle

Medial Sounds


Look at each picture. Use a middle sound from the box to complete each word.

oo


ou

ea


oa




l _____ f




g _____ t



s _____ t




c _____ t




b _____ n




f _____ t



m _____ se




sp _____ l



m _____ n




h _____ se



h _____ d



t _____ m

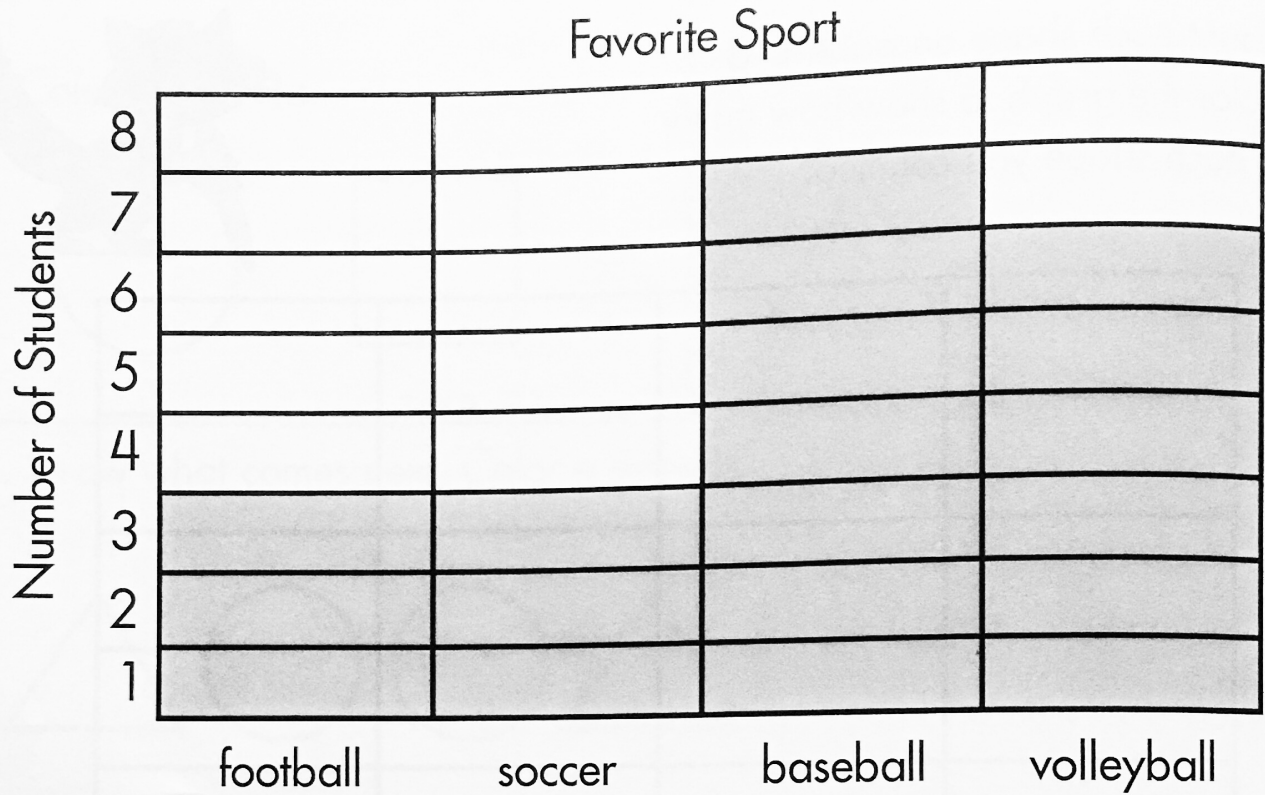


MATHEMATICS

$$1 + 2 = 3$$

Bar Graphs

Name _____ Date _____




Use the graph to answer the questions.

1. How many students play football?


2. How many students play baseball?

3. How many students play soccer?

4. How many students play volleyball?



4 Hundred Board




Picture Graphs

Name _____

Date _____

Favorite Ice Cream



Unit 3

Use the graph to answer the questions.

1. How many students like chocolate ice cream?

2. How many students like vanilla ice cream?

3. How many students like chocolate chip ice cream?

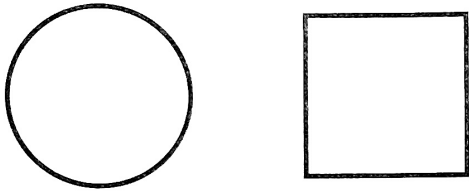
4. How many students like strawberry ice cream?

- No borrowing please! -

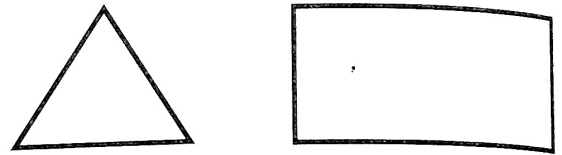
Shape and Pattern Practice

Name _____ Date _____

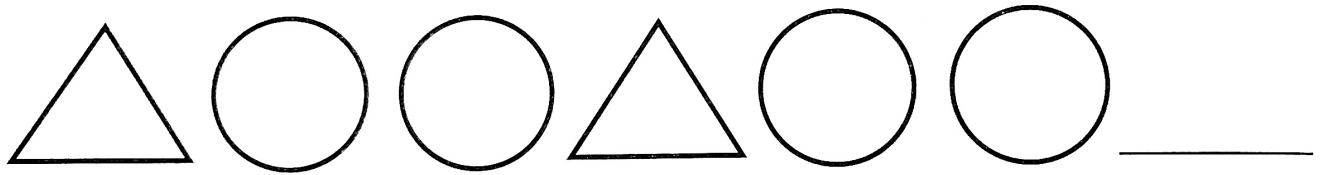
1. Color the **circle**.



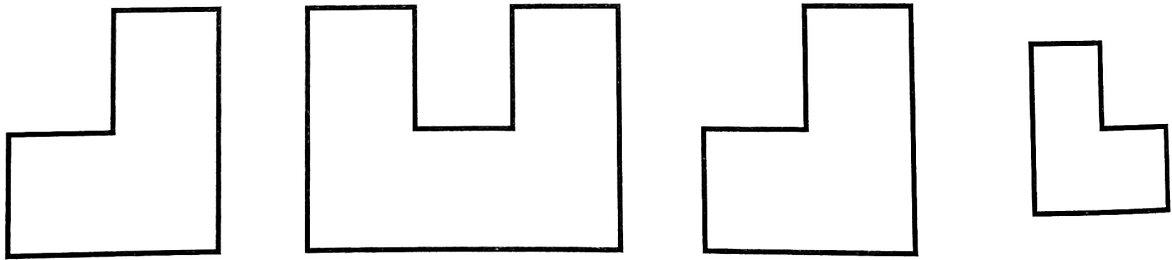
2. Color the **rectangle**.




3. Draw what comes next. Color a pattern.



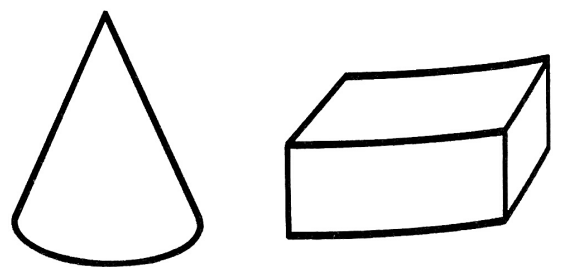
4. Color the shapes that are **congruent**.



5. Color the **cube**.



6. Color the **cone**.



	-		=	
--	---	--	---	--

	-		=	
--	---	--	---	--

	-		=	
--	---	--	---	--

	-		=	
--	---	--	---	--

	-		=	
--	---	--	---	--

	-		=	
--	---	--	---	--

	-		=	
--	---	--	---	--

	-		=	
--	---	--	---	--

--	--	--	--	--

--	--	--	--	--

--	--	--	--	--

--	--	--	--	--

--	--	--	--	--

--	--	--	--	--

--	--	--	--	--

--	--	--	--	--

--	--	--	--	--

--	--	--	--	--

--	--	--	--	--

--	--	--	--	--

Numbers: Expanded Form

Name _____ Date _____

Write the number.

$$1. \quad 30 + 5 = \underline{35} \quad 80 + 2 = \underline{\quad\quad\quad} \quad 70 + 1 = \underline{\quad\quad\quad}$$

$$2. \quad 60 + 3 = \underline{\quad\quad\quad} \quad 40 + 7 = \underline{\quad\quad\quad} \quad 20 + 2 = \underline{\quad\quad\quad}$$

$$3. \quad 10 + 9 = \underline{\quad\quad\quad} \quad 90 + 1 = \underline{\quad\quad\quad} \quad 50 + 6 = \underline{\quad\quad\quad}$$

$$4. \quad 30 + 2 = \underline{\quad\quad\quad} \quad 80 + 5 = \underline{\quad\quad\quad} \quad 60 + 8 = \underline{\quad\quad\quad}$$

Write an addition sentence.

$$5. \quad 49 = \underline{\quad\quad} + \underline{\quad\quad} \quad 26 = \underline{\quad\quad} + \underline{\quad\quad} \quad 15 = \underline{\quad\quad} + \underline{\quad\quad}$$

$$6. \quad 53 = \underline{\quad\quad} + \underline{\quad\quad} \quad 45 = \underline{\quad\quad} + \underline{\quad\quad} \quad 62 = \underline{\quad\quad} + \underline{\quad\quad}$$

$$7. \quad 74 = \underline{\quad\quad} + \underline{\quad\quad} \quad 80 = \underline{\quad\quad} + \underline{\quad\quad} \quad 79 = \underline{\quad\quad} + \underline{\quad\quad}$$

$$8. \quad 57 = \underline{\quad\quad} + \underline{\quad\quad} \quad 61 = \underline{\quad\quad} + \underline{\quad\quad} \quad 98 = \underline{\quad\quad} + \underline{\quad\quad}$$




Place Value Practice

Name _____

Date _____

Match.



8 tens and 3 ones

97

 $50 + 8$

5 tens and 8 ones

58

 $30 + 1$

3 tens and 1 one

31

 $90 + 7$

9 tens and 7 ones

26

 $80 + 9$

8 tens and 9 ones

64

 $60 + 4$

7 tens and 5 ones

83

 $20 + 6$

6 tens and 4 ones

75

 $40 + 3$

2 tens and 6 ones

89

 $10 + 7$

1 ten and 7 ones

43

 $80 + 3$

4 tens and 3 ones

17

 $70 + 5$

4	-	2	=	
---	---	---	---	--

8	-	5	=	
---	---	---	---	--

3	-	1	=	
---	---	---	---	--

6	-	4	=	
---	---	---	---	--

7	-	3	=	
---	---	---	---	--

9	-	5	=	
---	---	---	---	--

2	-	1	=	
---	---	---	---	--

5	-	3	=	
---	---	---	---	--

9	-	2	=	
---	---	---	---	--

4	-	1	=	
---	---	---	---	--

5	-	4	=	
---	---	---	---	--

2	-	2	=	
---	---	---	---	--

7	-	5	=	
---	---	---	---	--

6	-	3	=	
---	---	---	---	--

3	-	2	=	
---	---	---	---	--

8	-	4	=	
---	---	---	---	--